

**First Semestral Assessment 2016**  
**Primary 6 Mathematics**

**Date: 10<sup>th</sup> May 2016**

Questions 1 to 10 carry 1 mark each. Questions 11 to 15 carry 2 marks each. For each question, four options are given. One of them is the correct answer. Make your choice (1, 2, 3 or 4). Shade the oval (1, 2, 3 or 4) on the Optical Answer Sheet.

*All diagrams in this paper are not drawn to scale.*

(20 marks)

1. 2 million, 7 ten thousands and 3 tens has the same value as \_\_\_\_\_.

- (1) 207 030
- (2) 270 003
- (3) 2 070 003
- (4) 2 070 030

2. Which of the following fractions is less than  $\frac{1}{2}$ ?

- (1)  $\frac{4}{7}$
- (2)  $\frac{5}{9}$
- (3)  $\frac{5}{12}$
- (4)  $\frac{6}{11}$

3. Express the sum of  $\frac{3}{10}$  and  $\frac{5}{1000}$  as a decimal.

- (1) 0.035
- (2) 0.305
- (3) 0.350
- (4) 3.005

4. What is the maximum number of books Megan can purchase with \$89?

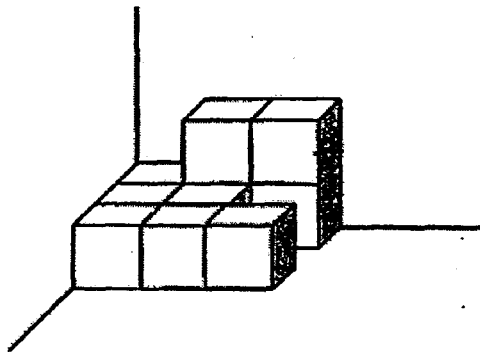
**Storybooks on Sale!**

3 books for \$20

OR

1 book for \$8.50

- (1) 5  
(2) 13  
(3) 30  
(4) 4
5. The figure below is made up of identical 1-cm cubes. What is the minimum number of cubes to be added to form a bigger cube?

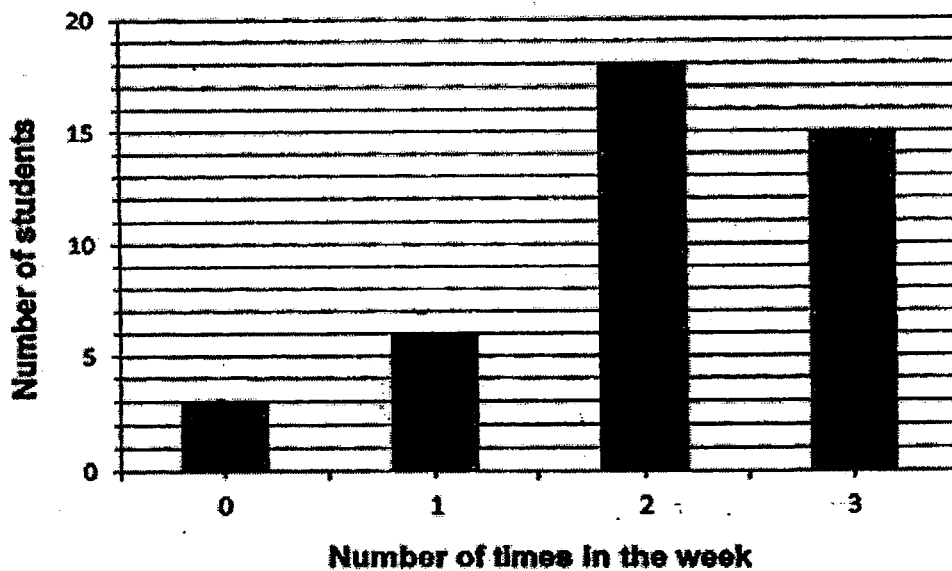


- (1) 17  
(2) 18  
(3) 27  
(4) 54

6. A movie started at 22.00. It ended  $2\frac{1}{4}$  hours later. What time did the movie end?

- (1) 12.15 a.m.
- (2) 12.15 p.m.
- (3) 12.25 a.m.
- (4) 12.25 p.m.


7. The bar graph below shows the number of students in Primary 6A who played at the school field last week.



How many pupils played at the school field at least twice last week?

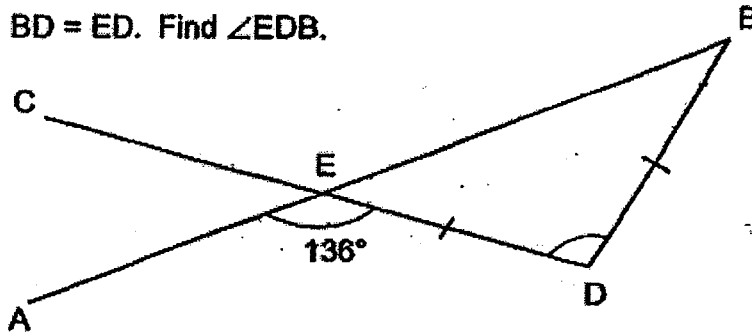
- (1) 18
- (2) 27
- (3) 33
- (4) 42

8. The figure is not drawn to scale. PQRS is a parallelogram.  
Which of the following statements is true?



- (1)  $\angle RSP + \angle PQR = 180^\circ$
- (2)  $\angle SPQ + \angle RSP = 180^\circ$
- (3)  $\angle RSP = \angle SPQ$
- (4)  $\angle SPQ = \angle PQR$

9. The figure below is not drawn to scale. AEB and CED are straight lines.  
 $BD = ED$ . Find  $\angle EDB$ .



- (1)  $22^\circ$
- (2)  $44^\circ$
- (3)  $92^\circ$
- (4)  $136^\circ$

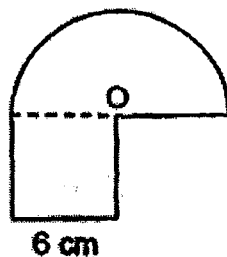
10. A rectangular field had a length of  $6t$  metres and a breadth of 30 metres. Sandra ran round the field once. Express the total distance Sandra ran in terms of  $t$ .

- (1)  $(6t + 30)$  m
- (2)  $(6t + 60)$  m
- (3)  $(12t + 30)$  m
- (4)  $(12t + 60)$  m

11. Justin took several days to read a new novel. On the first day, he read 6 pages. Each day, he read 3 more pages than the day before. On the last day, he read 18 pages. How many days did he take to read the novel?

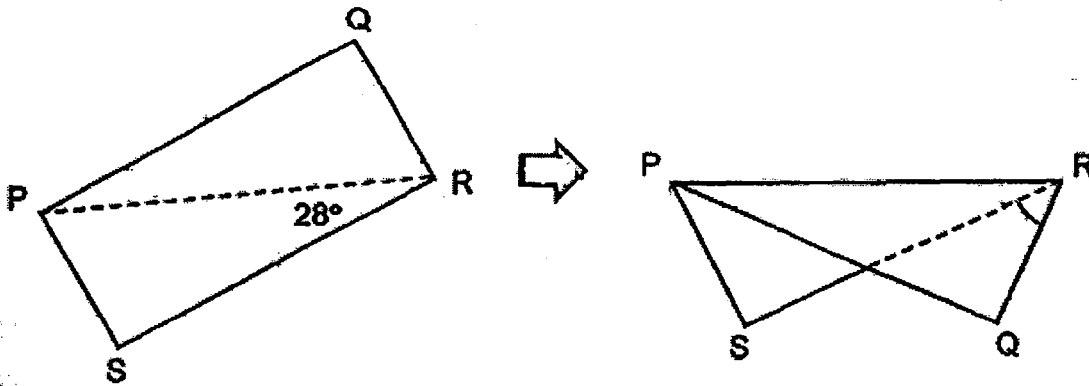
- (1) 5
- (2) 6
- (3) 3
- (4) 4

12. The figure below is not drawn to scale. It is made up of a semicircle with centre O and a square with side 6 cm. What is the perimeter of the whole figure? (Take  $\pi = 3.14$ )



- (1) 27.42 cm
- (2) 33.42 cm
- (3) 36.84 cm
- (4) 42.84 cm

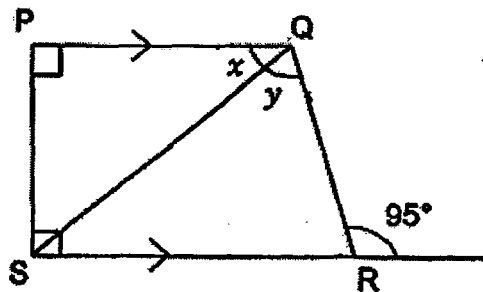
13. A rectangle PQRS is folded along its diagonal PR as shown.  
Given that  $\angle PRS = 28^\circ$ , find  $\angle QRS$ .



- (1)  $17^\circ$
- (2)  $31^\circ$
- (3)  $34^\circ$
- (4)  $62^\circ$

14. The figure below is not drawn to scale. PQRS is a trapezium.

$\angle x$  is  $\frac{2}{3}$  of  $\angle y$ . Find  $\angle x$ .



- (1)  $38^\circ$
- (2)  $45^\circ$
- (3)  $57^\circ$
- (4)  $85^\circ$

15. Wei Ling baked some cookies. She kept  $\frac{7}{10}$  of the cookies for herself and gave the rest to Ben and Ravi in the ratio 5 : 1. Ben received 20 more cookies than Ravi. How many cookies did Wei Ling keep for herself?

- (1) 28
- (2) 35
- (3) 56
- (4) 70



**First Semestral Assessment 2016**  
**Primary 6 Mathematics**

**Date: 10<sup>th</sup> May 2016**

Questions 16 to 25 carry 1 mark each. Write your answers in the spaces provided. For questions which require units, give your answers in the units stated. (10 marks)

Do not write  
in this space

*All diagrams in this paper are not drawn to scale unless stated otherwise.*

16. Find the product of 72.03 and 6.

Ans: \_\_\_\_\_

17. What is the sum of all the factors of 18?

Ans: \_\_\_\_\_

18. How many millilitres are there in 30.08 litres?

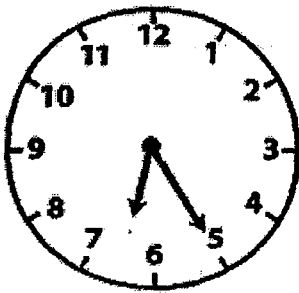
Ans: \_\_\_\_\_ ml

19. 30% of a number is 420. What is the number?

Do not write  
in this space

Ans: \_\_\_\_\_

20. The clock shows the time on Kevin's watch at the end of his 2-hour swimming lesson. His watch is 15 min faster than the actual time. What time did his swimming lesson start?

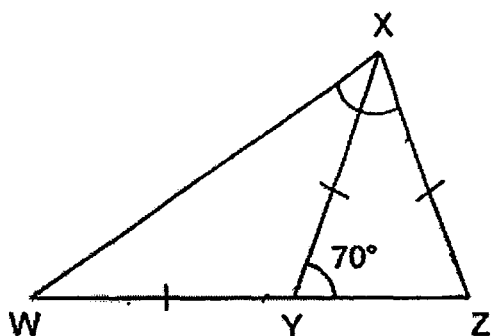


Ans: \_\_\_\_\_ p.m.

21. Tiffany scored an average of 64 marks in her first 2 tests. How many marks must she score in her third test to get an average of 70 marks for the 3 tests?

Ans: \_\_\_\_\_

22. The figure below is not drawn to scale. XYZ is an isosceles triangle.  $XY = WY$ . Find  $\angle WXZ$ .



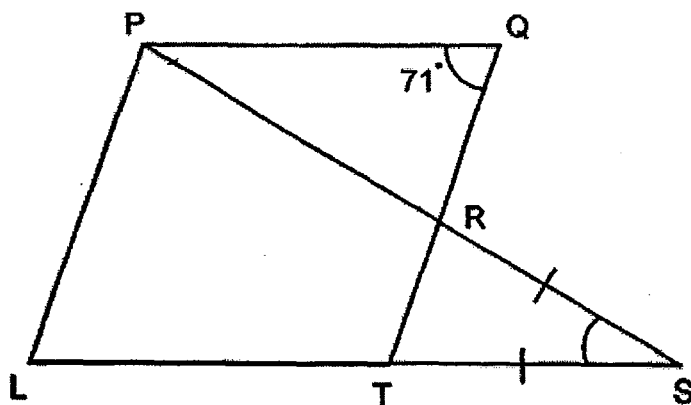
Ans: \_\_\_\_\_°

Do not write  
in this space

23. What is the perimeter of a semicircle with radius 14 cm? (Take  $\pi$  as  $\frac{22}{7}$ )

Ans: \_\_\_\_\_ cm

24. The figure below is not drawn to scale. PQTL is a rhombus and PRS and LTS are straight lines. Find  $\angle RST$ .



Ans: \_\_\_\_\_°

25. At a sale, the price of a printer decreased by 15% to \$170. What is the original price of the printer?

Do not write  
in this space

Ans: \$ \_\_\_\_\_

Questions 26 to 30 carry 2 marks each. Show your workings clearly in the space provided for each question and write your answers in the spaces provided. For questions which require units, give your answers in the units stated.

(10 marks)

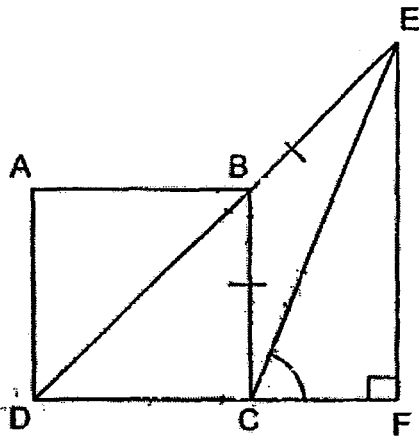
*All diagrams in this paper are not drawn to scale unless stated otherwise.*

26. Iris has some sweets. When she packs them into bags of 3 or 8, there will be no remaining sweets. When the sweets are packed into bags of 5, she will be short of 2 sweets. What is the smallest possible number of sweets she has?

Ans: \_\_\_\_\_

27. The figure below is not drawn to scale. ABCD is a square.  $CB = BE$ , CEF is a right-angled triangle and DBE is a straight line. Find  $\angle ECF$ .

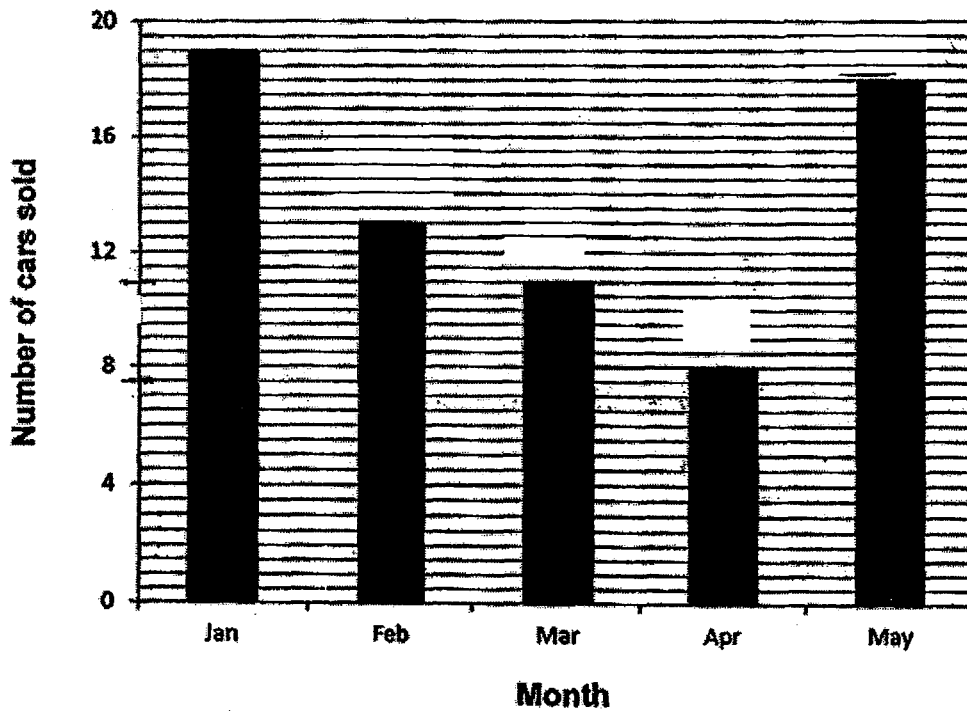
Do not write in this space



Ans: \_\_\_\_\_



28. The bar graph below shows the number of cars sold over 5 months. What is the ratio of number of cars sold in February to the total number of cars sold in the five months? Give your answer in simplest form.

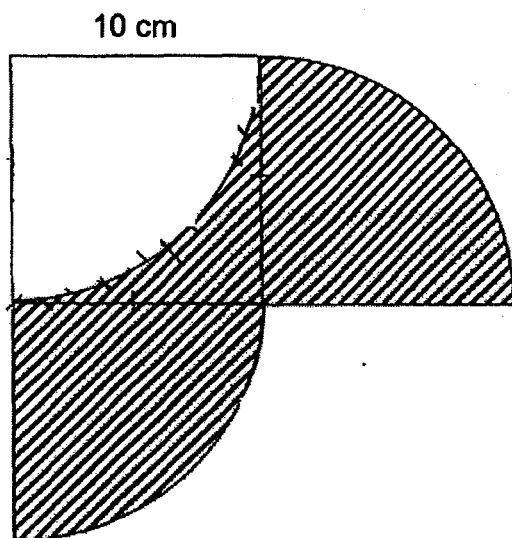


Ans: \_\_\_\_\_



29. The figure below is made up of a square and 2 quarter-circles. What is the perimeter of the shaded part? Leave your answer in terms of  $\pi$ .

Do not write  
in this space



Ans: \_\_\_\_\_ cm

30. Zali is  $w$  years old 5 years ago. His sister is 2 years younger than him. What will be their combined age 10 years from now?

Ans : \_\_\_\_\_

End of paper. Have you checked your work?



**Rosyth School**  
**First Semestral Assessment 2016**  
**Primary 6 Mathematics**

Name: \_\_\_\_\_ Register No. \_\_\_\_\_

Class: Pr 6 - \_\_\_\_\_

Date: 10<sup>th</sup> May 2016

Parent's Signature: \_\_\_\_\_

Time: 1 h 40 minutes

---

**PAPER 2**

**Instructions to Pupils:**

1. Do not open this booklet until you are told to do so.
2. Follow all instructions carefully.
3. Show your workings clearly as marks are awarded for correct working.
4. Write your answers in this booklet.
5. You are allowed to use a calculator
6. Answer all questions.

Questions	Maximum Mark	Marks Obtained
Q 1 to 5	10	
Q 6 to 18	50	

Section	Maximum Mark	Marks Obtained
Paper 1	40	
Paper 2	60	
Total	100	

\* This booklet consists of 16 printed pages (including this cover page)

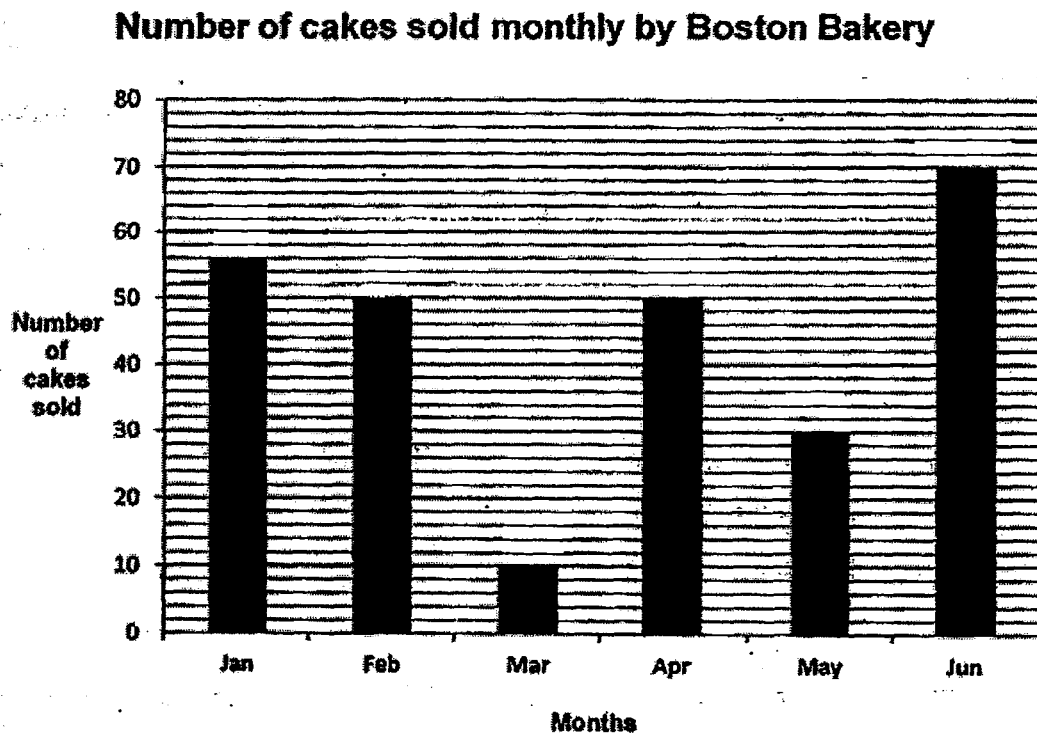
This paper is not to be reproduced in part or whole without the permission of the Principal.



Questions 1 to 5 carry 2 marks each. Show your working clearly in the space provided for each question and write your answers in the spaces provided. For questions which require units, give your answers in the units stated. All diagrams are not drawn to scale unless stated otherwise. (10 marks)

Do not write  
in this space

1. The bar graph below shows the number of cakes sold monthly from January to June by Boston Bakery.



What was the average number of cakes sold from February to May?

Ans: \_\_\_\_\_ [2m]

2. Melvin had to answer 15 questions in an English test. He took half an hour for the first 10 questions. Melvin started the test at 10.45 a.m. and completed the test at 12.30 p.m. How long did he take to complete the last 5 questions?

Do not write  
in this space

Ans: \_\_\_\_\_ [2m]

3. Carolyn wanted to buy an iPad that costs \$556.40 including 7% GST. During a sale, she did not need to pay GST and was given an additional discount of \$88. How much did Carolyn have to pay in the end?

Ans: \$ \_\_\_\_\_ [2m]

4. The ratio of the perimeter of Rectangle X to the perimeter of Square Y is 6 : 1.  
The perimeter of Rectangle X is 168 cm. What is the area of Square Y?


Do not write  
in this space

Ans: \_\_\_\_\_ cm<sup>2</sup> [2m]



5. 4 years ago, Susan was thrice as old as Uman. If Uman is 19 years old now, how old is Susan now?

Ans: \_\_\_\_\_ [2m]



Questions 6 to 18, show your working clearly in the space provided for each question and write your answers in the spaces provided. The number of marks available is shown in brackets [ ] at the end of each question or part-question.

(50 marks)

Do not write  
in this space

6. Ahmad spent  $\frac{1}{3}$  of his salary on food and gave  $\frac{3}{8}$  of the remainder to his mother. He saved the remaining \$3622. How much money did he spend on food?

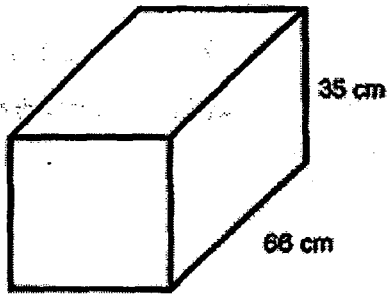
Ans: \_\_\_\_\_ [3m]

7. Tom and Jenny had \$357 altogether. Tom gave  $\frac{2}{5}$  of his money to his father and Jenny spent 75% of her money. They found that they had an equal amount of money left. How much did Jenny spend?

Ans: \_\_\_\_\_ [3m]

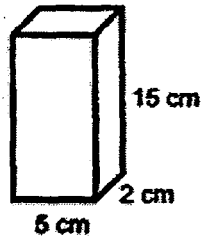
8. Jimmy filled  $\frac{5}{9}$  of a rectangular tank measuring 30 cm by 66 cm by 35 cm with fruit juice. All of the fruit juice from the tank was poured into some rectangular containers measuring 5 cm by 2 cm by 15 cm to the brim. What is the height of the fruit juice in the last container?

Do not write  
in this space



30 cm

Tank



5 cm

Container

Ans: \_\_\_\_\_ [3m]

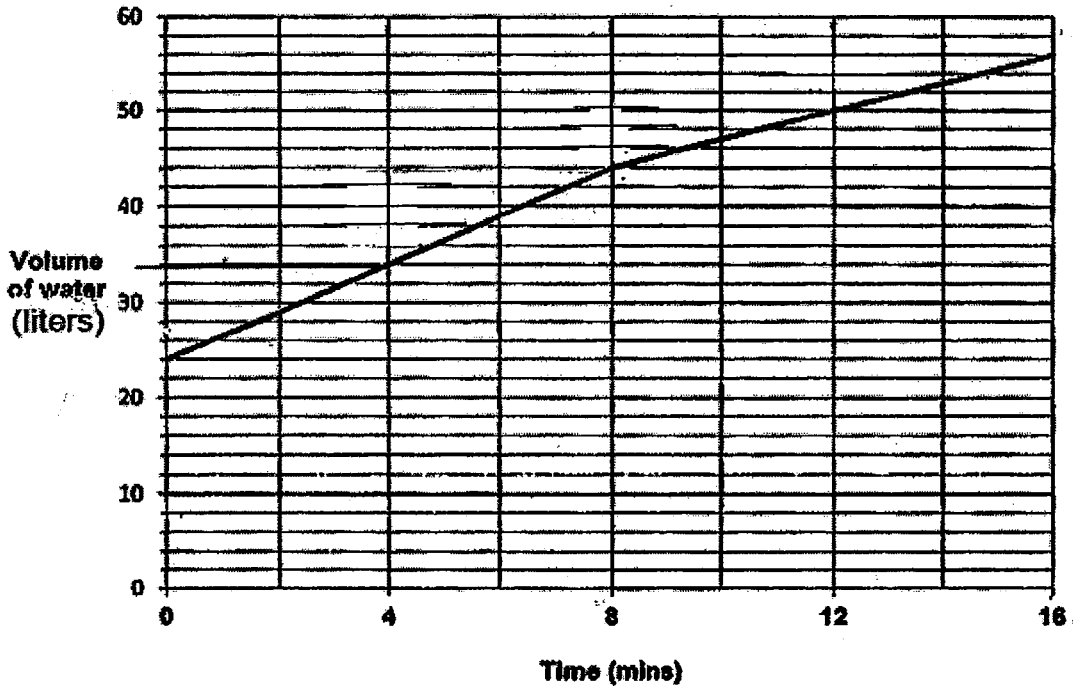


(Go on to the next page)

9. The tank contained some water at first. Tap A was turned on to fill the tank with water at a constant rate. After 8 minutes, Tap B tap was turned on to drain water out of the tank at a constant rate.

Do not write  
in this space

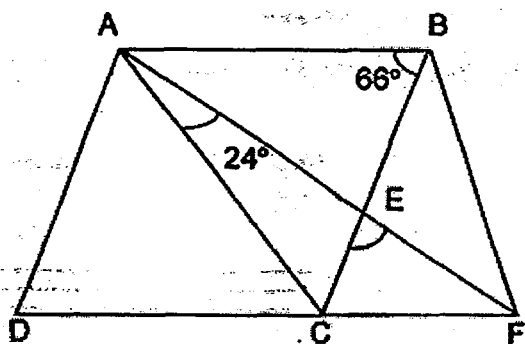
The graph below shows the volume of water in the tank during the 16 minute period.



How many litres of water did Tap B drain every minute?

Ans: \_\_\_\_\_ [3m]

10. ABCD is a rhombus. AEF and DCF are straight lines.  $\angle ABC = 66^\circ$  and  $\angle EAC = 24^\circ$ . Find  $\angle CEF$ .



Do not write  
in this space

Ans: \_\_\_\_\_ [3m]



11. If Jacobs gave Min Hui 70 stamps, he would have the same number of stamps as Min Hui. If Min Hui gave Jacobs 28 stamps, the ratio of the number of stamps she had to the number of stamps that Jacobs had would be 1 : 8. How many stamps did Min Hui have?

Do not write  
in this space

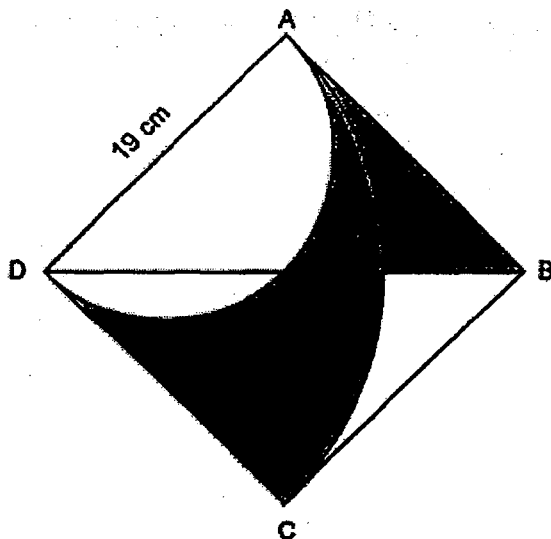
Ans: \_\_\_\_\_ [3m]





12. ABCD is a square of side 19 cm. A quadrant and a semicircle are drawn inside the square. Find the area of the shaded part using calculator  $\pi$ . Give your answer to the nearest 2 decimal places.

Do not write  
in this space



Ans: \_\_\_\_\_ [4m]



13. At an electronics sale, the usual price of a camera is 25% that of a notebook before including a GST of 7%. Michael bought a camera and a notebook for a total of \$2675 after including GST.

Do not write  
in this space

- a) What is the cost of the notebook with GST?
- b) What is the total GST paid on the 2 items?

Ans: a) \_\_\_\_\_ [2m]

Ans: b) \_\_\_\_\_ [2m]



14. James and Susan had 289 stamps altogether. Susan had 33 fewer stamps than James. James sold twice as many stamps as Susan and had the same number of stamps that Susan had left.

Do not write  
in this space

- a) How many stamps had Susan left?  
b) How many stamps did James have at first?

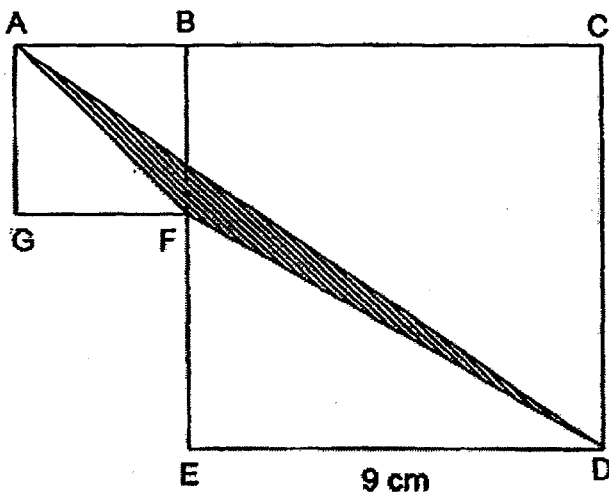
Ans: a) \_\_\_\_\_ [3m]

Ans: b) \_\_\_\_\_ [2m]



15. The figure below is made up of two squares, ABFG, BCDE and a triangle ADF. The ratio of the length of AB to the length of BC is 1 : 3. DE = 9 cm. Find the shaded area.

Do not write  
in this space

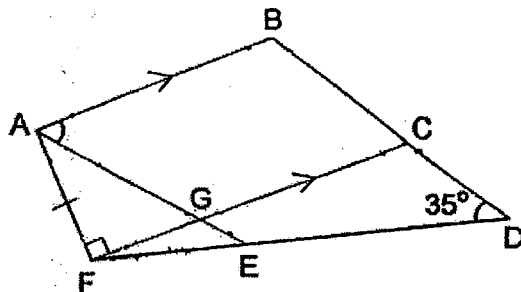


Ans: \_\_\_\_\_ [5m]



16. ABCG is a trapezium and  $EF = AF$ . AFG is a right-angled triangle. BCD, DEF and CGF are straight lines. The ratio of  $\angle AFE$  to  $\angle BAG$  is  $2 : 1$  and  $\angle ABC$  is thrice as much as  $\angle BAG$ .

- a) Find  $\angle BAG$ .  
b) Find  $\angle EFG$ .



Do not write  
in this space

Ans: a) \_\_\_\_\_ [2m]

Ans: b) \_\_\_\_\_ [2m]



17. The ratio of the number of chocolates to the number of sweets that John bought was 2 : 7. The cost of a chocolate was \$1.70 more than the cost of a sweet. He paid \$299.60 for the chocolates and sweets. If the total cost of the sweets was \$92.40 more than the total cost of chocolates, how many chocolates and sweets did John buy altogether?

Do not write  
in this space

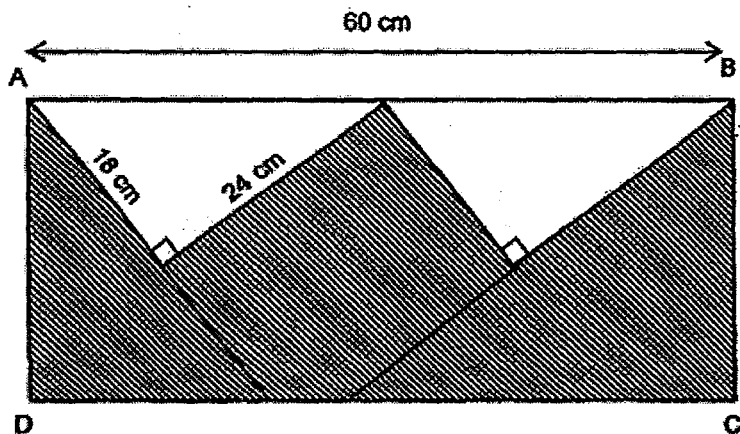
Ans: \_\_\_\_\_ [5m]



18. In the figure below, ABCD is a rectangle. ABCD contains 2 identical right-angled triangles. The perimeter of the shaded part is 210 cm.

Do not write  
in this space

What is the ratio of the area of the 2 triangles to the area of the shaded part?  
Give your answer in the simplest form.



Ans: \_\_\_\_\_ [5m]







# ANSWER SHEET

EXAM PAPER 2016

SCHOOL : ROSYTH

SUBJECT : P6 MATHEMATICS

TERM : SA1

Q1	Q2	Q3	Q4	Q5	Q6	Q7	Q8	Q9	Q10
4	3	1	2	1	3	3	2	2	4
Q11	Q12	Q13	Q14	Q15					
1	4	3	1	4					

16) 432.18

17) 39

18) 30080ml

19) 1400

20) 4.10p.m.

21) 82

22)  $75^\circ$

23) 72cm

24)  $38^\circ$

25) \$200

26) 48

27)  $67.5^\circ$

28) 13.69

29)  $(15\pi + 20)\text{cm}$

30)  $(2w + 28)$

## Paper 2

1) Total  $\rightarrow 50 + 10 + 50 + 30 = 140$

Average  $\rightarrow 140 \div 4 = 35$

2)  $45 + 30 = 75$

75 mins  $\rightarrow$  1hr 15 min

3)  $107\% \rightarrow 556.40$

$1\% \rightarrow 556.40 \div 107 = 5.20$

$5.20 \times 100 = 520$

$520 - 88 = \$432$

4)  $168 \div 6 = 28$

$28 = 7 + 7 + 7 + 7$

$7 \times 7 = 49\text{cm}^2$

5)  $19 - 4 = 15$  (Uman 4 years ago)

$15 \times 3 + 4 = 49$

6)  $10u \rightarrow 3622$

$1 u \rightarrow 3622 \div 10 = 362.20$

$362.20 \times 8 = 2897.60$

7) Tom :  $5X$

Jerry :  $12X$

$17X = \$357$

$9X = \$357/7 \times 9 = \$189$

8)  $256 \times 150 = 38400$

$38500 - 38400 = 100$

$100 \div (2 \times 6) = 10 \text{ cm}$

9)  $44L - 32L = 10L$

$10L - 6L = 4L$

$4L \div 4 = 1L$

10)  $\angle ECD = 180^\circ - 66^\circ = 114^\circ$

$$\angle ECA = (180^\circ - 66^\circ) \div 2 = 57^\circ$$

$$\angle CEA = 180^\circ - 57^\circ - 24^\circ = 99^\circ$$

$$\angle CEF = 180^\circ - 99^\circ = 81^\circ$$

11)  $7u \rightarrow 28 + 70 + 70 + 28 = 196$

$$1u \rightarrow 196 \div 7 = 28$$

$$MH \rightarrow 28 + 28 = 56 \text{ stamps}$$

12)  $19\text{cm} \times 19\text{cm} = 361\text{cm}^2$

$$19\text{cm} \div 2 = 9.5\text{cm}$$

$$9.5\text{cm} \times 9.5\text{cm} = 90.25\text{cm}^2$$

$$90.25\text{cm}^2 \div 2 = 45.125\text{cm}^2$$

$$361\text{cm}^2 \div 4 = 90.25\text{cm}^2$$

$$\text{Shaded Area} \rightarrow [(361\text{cm}^2 - 90.25\text{cm}^2)] \div 2 +$$

$$(90.25\text{cm}^2 - 45.125\text{cm}^2) = 180.50\text{cm}^2$$

13) a)  $\text{Camera} + \text{Notebook} \rightarrow 100/107 \times \$2675 = \$2500$

$$\text{Notebook} \rightarrow (\$2500 \div 5) \times 4 = \$2000$$

$$107/100 \times \$2000 = \$2140$$

b)  $7/100 \times \$2500 = \$175$

14) a)  $33 \times 2 = 66$

$$(289 - 33) \div 2 = 128$$

$$128 - 33 = 96$$

b)  $(298 + 33) \div 2 = 161$

15) Area of  $\triangle AGF \rightarrow \frac{1}{2} \times 3\text{cm} \times 3\text{cm} = 4.5\text{cm}_2$

Area of  $\triangle ADC \rightarrow \frac{1}{2} \times 12\text{cm} \times 9\text{cm} = 54\text{cm}_2$

Area of  $\triangle FED \rightarrow \frac{1}{2} \times 9\text{cm} \times 6\text{cm} = 27\text{cm}_2$

$(9\text{cm} \times 9\text{cm}) + (3\text{cm} \times 3\text{cm}) = 90\text{cm}_2$

$90\text{cm}_2 - 4.5\text{cm}_2 - 54\text{cm}_2 - 27\text{cm}_2 = 4.5\text{cm}_2$

16)a)  $\angle ABC + \angle AFE = 360^\circ - 35^\circ - 90^\circ = 235^\circ$

$\angle BAG = 235^\circ \div 5 = 47^\circ$

b)  $\angle AFE = 47^\circ \times 2 = 94^\circ$

$\angle EFG = 94^\circ - 90^\circ = 4^\circ$

17)  $\$299.60 - \$92.40 = \$207.20$

$\$207.20 \div 2 = \$103.60$

$\$103.60 \div 2 = \$51.80$

$\$51.80 - \$28 = \$23.80$

$14 \times 9 = 126$

$210 - 144 = 66$

18)  $210\text{cm} - [(18\text{cm} + 24\text{cm}) \times 2] - 60\text{cm} = 66\text{cm}$

$66\text{cm} \div 2 = 33\text{cm}$

$66\text{cm} \times 33\text{cm} = 1980\text{cm}_2$

$18\text{cm} \times 24\text{cm} = 432\text{cm}_2$

$1980\text{cm}_2 - 432\text{cm}_2 = 1548\text{cm}_2$

Triangles : Shaded

432 : 1548

12 : 43

ANS: 12 : 43